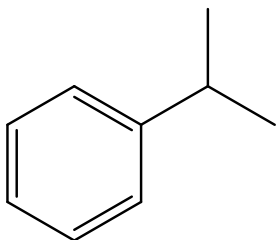
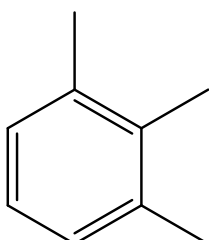


Give the IUPAC name for each compound.

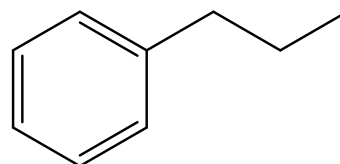
A



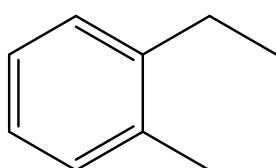
B



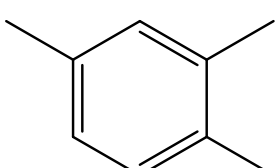
C



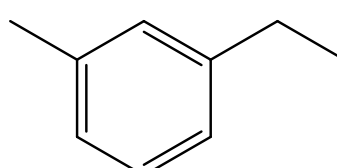
D



E

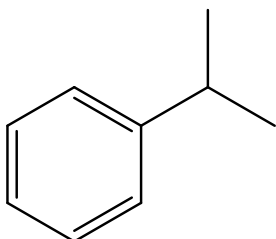


F



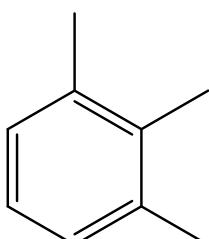
The names of the compounds above according to IUPAC are:

A



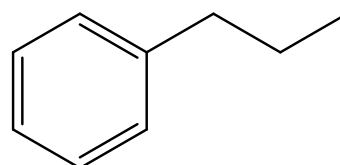
isopropylbenzene

B



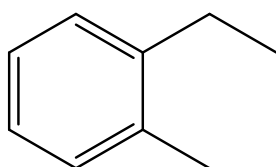
1,2,3-trimethylbenzene

C



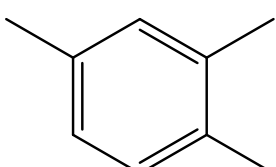
propylbenzene

D



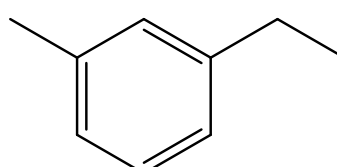
1-ethyl-2-methylbenzene

E



1,2,4-trimethylbenzene

F



1-ethyl-3-methylbenzene